

CENTRE FOR EDUCATIONAL DEVELOPMENT & RESEARCH,
PUNE, MAHARASHTRA

QUESTION BANK

1st & 2nd

2025

CENTRE FOR EDUCATIONAL DEVELOPMENT & RESEARCH, PUNE

Section A
All About Myself

1. My name is
2. I am years old
3. My favourite food is.....
4. Colour of my eyes is
5. My father's name.....
6. My mother's name.....
7. My favourite game is.....
8. My favourite colour is.....
10. My favourite animal is
11. My favourite fruit is.....
12. I live at my.....
13. My school name is.....
- 14 On holidays I like to
16. My birthday date is on
17. My favourite season is.....
18. My favourite cartoon is.....
19. My favourite sport is.....
20. I like to draw picture of.....

Section B
Colours and Shapes

1. What colour is the sky during a sunny day?



- a) Green
- b) Blue
- c) Red
- d) Yellow

2. What shape is a ball?



- a) Square
- b) Circle
- c) Triangle
- d) Rectangle

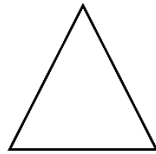
3. What color is a banana?



- a) Red
- b) Blue

- c) Yellow
- d) Purple

4. What shape has three sides?



- a) Circle
- b) Square
- c) Triangle
- d) Rectangle

5. What color is an apple?



- a) Green
- b) Purple
- c) Red
- d) Both a and c

6. What color is grass?




- a) Brown
- b) Yellow

c) Green

d) Blue

7. Which shape has four equal sides?



a) Rectangle

b) Circle

c) Square

d) Triangle

8. What color is this ?




a) Pink

b) Purple

c) Orange

d) Brown

9. What shape is a stop sign



a) Octagon

b) Square

- c) Circle
- d) Triangle

10. What color are strawberries?



- a) Blue
- b) Red
- c) Green
- d) Yellow

Section C

All About Numbers

1. What comes after 5?

- a) 4
- b) 6
- c) 7

2. What is $3 + 3$?

- a) 5
- b) 6
- c) 7

3. How many sides does a triangle have?

- a) 2
- b) 3

c) 4

4. How many fingers do you have?

a) 10

b) 8

c) 12

5. What is the value of $2 + 5$?

a) 6

b) 7

c) 8

6. Which is a bigger number: 8 or 12?

a) 8

b) 12

c) They are the same

7. What is the shape of a coin?

a) Square

b) Circle

c) Triangle

8. How many wheels does a car have?

a) 2

b) 4

c) 6

9. How many days are in a week?

a) 6

b) 7

c) 8

10. Which is an odd number?

a) 2

b) 3

c) 4

11. What comes after 9?

a) 8

b) 10

c) 11

12. What is the smallest number here: 5, 7, 3?

a) 3

b) 5

c) 7

13. What is the largest number here: 1, 3, 2?

a) 1

b) 3

c) 2

14. How many legs does a dog have?

a) 3

b) 4

c) 5

15. What is $10 - 4$?

a) 5

b) 6

c) 7

16. How many stars are in the sky during the day?

a) 1

b) 2

c) 0

17. How many letters are there in the alphabet?

a) 25

b) 26

c) 27

18. What is the value of $10 + 5$?

a) 14

b) 15

c) 16

19. What is the value of $4 + 1$?

a) 6

b) 4

c) 5

20. What comes after 19?

a) 18

b) 20

c) 21

Section D

All About Alphabets

1. What is the first letter of the alphabet?
 - a) A
 - b) B
 - c) C
2. What comes after the letter D?
 - a) E
 - b) F
 - c) G
3. Which letter comes before M?
 - a) N
 - b) L
 - c) O
4. What is the last letter of the alphabet?
 - a) X
 - b) Y
 - c) Z
5. Which of these is a vowel?
 - a) C
 - b) E
 - c) G
6. What comes after the letter Q?
 - a) P
 - b) R
 - c) S
7. Which letter is in the middle of the alphabet?
 - a) M
 - b) N
 - c) O
8. What comes before the letter T?
 - a) S
 - b) R
 - c) U
9. Which letter comes between B and D?
 - a) E
 - b) C
 - c) A
10. How many letters are there in the alphabet?
 - a) 24
 - b) 25
 - c) 26

Section E

Days, Months, and Seasons

1. How many days are there in a week?

- a) 5
- b) 6
- c) 7
- d) 8

2. Which day comes after Monday?

- a) Sunday
- b) Tuesday
- c) Wednesday
- d) Thursday

3. What is the season when it snows?

- a) Summer
- b) Winter
- c) Rainy
- d) Autumn

4. How many months are there in a year?

- a) 10
- b) 11
- c) 12
- d) 13

5. What is the first month of the year?

- a) March
- b) January
- c) April
- d) December

6. Which month has Halloween?

- a) September
- b) October
- c) November
- d) December

7. What season comes after spring?

- a) Summer
- b) Winter
- c) Autumn
- d) Rainy

8. Which day is known as "Funday"?

- a) Saturday
- b) Sunday
- c) Friday
- d) Thursday

9. In which month do we celebrate New Year's Eve?

- a) January
- b) December
- c) February
- d) November

10. What is the season when flowers bloom?

- a) Summer
- b) Winter
- c) Spring
- d) Autumn